



# education

---

Department:  
Education  
**REPUBLIC OF SOUTH AFRICA**

## **NATIONAL SENIOR CERTIFICATE**

### **GRADE 12**

### **CIVIL TECHNOLOGY**

### **FEBRUARY/MARCH 2010**

### **MEMORANDUM**

**MARKS: 200**

**This memorandum consists of 16 pages.**

**QUESTION 1****LO 3 AS 1,2,3,5,7,10**

- |     |       |   |     |
|-----|-------|---|-----|
| 1.1 | 1.1.1 | False ✓   | (1) |
|     | 1.1.2 | False ✓   | (1) |
|     | 1.1.3 | True ✓  | (1) |
|     | 1.1.4 | False ✓   | (1) |
|     | 1.1.5 | False ✓   | (1) |
| 1.2 | 1.2.1 | Angle grinder   | (1) |
|     | 1.2.2 | Steel<br>Aluminium<br>Copper<br>Concrete<br>Bricks (Masonry)<br>Plastics<br>Clay tiles<br><b>ANY FIVE OF THE ABOVE OR OTHER ACCEPTABLE ANSWERS</b>  | (5) |
|     | 1.2.3 | Part 1 – Blade ✓<br>Part 2 – Safety guard ✓   | (2) |
|     | 1.2.4 | The locking pin locks the axel to enable the operator to loosen the locking nut when replacing blades. ✓  | (1) |
|     | 1.2.5 | <ul style="list-style-type: none"> <li>• Always ensure that the safety guard is in place.</li> <li>• Always ensure that the blade is properly secured.</li> <li>• Use safety goggles when using the machine.</li> <li>• Use ear protection when using the machine.</li> <li>• Use protective clothing when operating the machine.</li> <li>• Keep the electric cord away from revolving parts of the machine.</li> <li>• Use a dust mask (depending on material being cut).</li> <li>• Use the approved blade for the type of work.</li> <li>• Never use a chipped or cracked blade on the machine.</li> <li>• Avoid working in wet conditions</li> </ul> <b>ANY THREE OF THE ABOVE OR OTHER ACCEPTABLE ANSWERS</b> | (3) |

1.3

METAL	PROPERTIES	USES
Aluminium	Castable, malleable, ductile, soft, light, non-corrosive ✓	Doors, windows, screws, face plate ✓
Copper	Good conductor of heat and electricity, malleable, tough ✓	Electrical wire, face plates, screws, nails, pipes. ✓

(4)

**ANY ONE OF THE ANSWERS IN EACH GRID IN THE TABLE OR ANY OTHER ACCEPTABLE ANSWER**

1.4

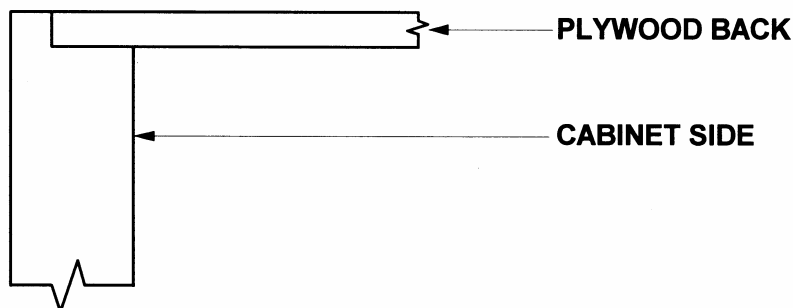
1.4.1

Masonite (hardboard), Chipboard, Plywood or Supawood.

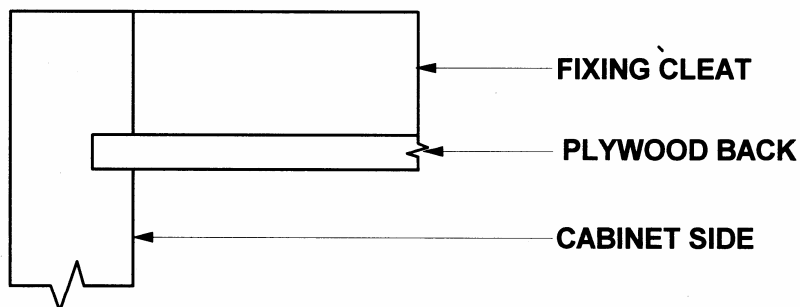
(1)

**ANY ONE OF THE ABOVE OR OTHER ACCEPTABLE ANSWER**

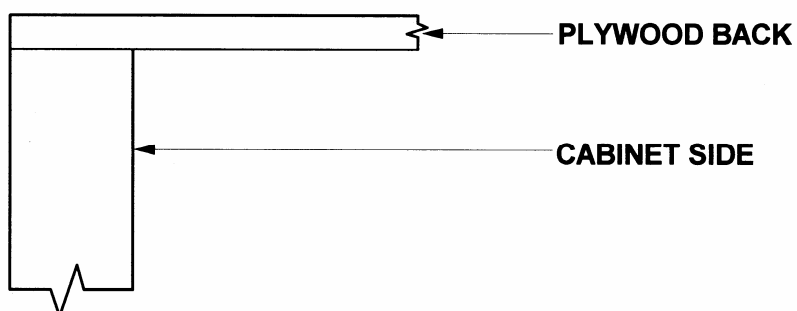
1.4.2



Sketch	= 1
Construction	= 2
Labels	= <u>2</u>
	5



Sketch	= 1
Construction	= 2
Labels	= <u>2</u>
	5



Sketch	= 1
Construction	= 2
Labels	= <u>2</u>
	5

**ANY ONE OF THE ABOVE** (5)

- 1.5      1.5.1      English bond ✓ (1)
- 1.5.2      Cross junction ✓ (1)
- 1.5.3      • In a large floor area which has to be divided into smaller rooms.  
                         • In libraries where study cubicles are required.  
                         • In alterations in old buildings where English bond were commonly used (1)
- ANY ONE OF THE ABOVE ANSWERS OR ANY OTHER ACCEPTABLE ANSWER**

**[30]**

**QUESTION 2****LO 3 AS 1,3,5,7,10**

2.1 2.1.1

- Location of the stand
- Size of the stand
- Are the municipal services available
- Servitude through the property
- Air pollution
- The view
- Type of soil
- The moisture content of the soil
- Main road
- Access road
- Noise
- Sunlight

**ANY FIVE OF THE ABOVE OR OTHER ACCEPTABLE ANSWERS**

(5)

2.1.2

- The area must be fenced in.
- The area must be kept clean.
- The building area must be well lit at night.
- Covered walkways must be erected under cranes.
- Hard hats and protective clothing must be worn.
- Sufficient and unambiguous notices must be put up on the building site.
- No unauthorised persons are allowed on site.
- Where dangerous excavation is in progress, it must be effectively enclosed.
- Scaffolding in use must stand firm and kept clean.
- Materials which are not immediately in use, must be neatly stored away.
- Control of delivery and other vehicles.

**ANY FIVE OF THE ABOVE OR OTHER ACCEPTABLE ANSWERS**

(5)

2.2

<b>CAVITY WALLS</b>	<b>SOLID WALLS</b>
<ul style="list-style-type: none"> <li>• It provides good sound insulation.</li> <li>• It provides good thermal (heat and cold) insulation.</li> <li>• It prevents moisture from entering the inner walls of the building.</li> </ul>	<ul style="list-style-type: none"> <li>• It is cheaper to construct than a cavity wall.</li> <li>• It is quicker to erect.</li> <li>• Does not require specialised craftsmanship to erect.</li> <li>• It uses less space (percentage of floor area taken up by walls) and gives more floor area between partition walls.</li> </ul>

**ANY TWO OF THE ABOVE FROM EACH COLUMN OR OTHER ACCEPTABLE ANSWERS**

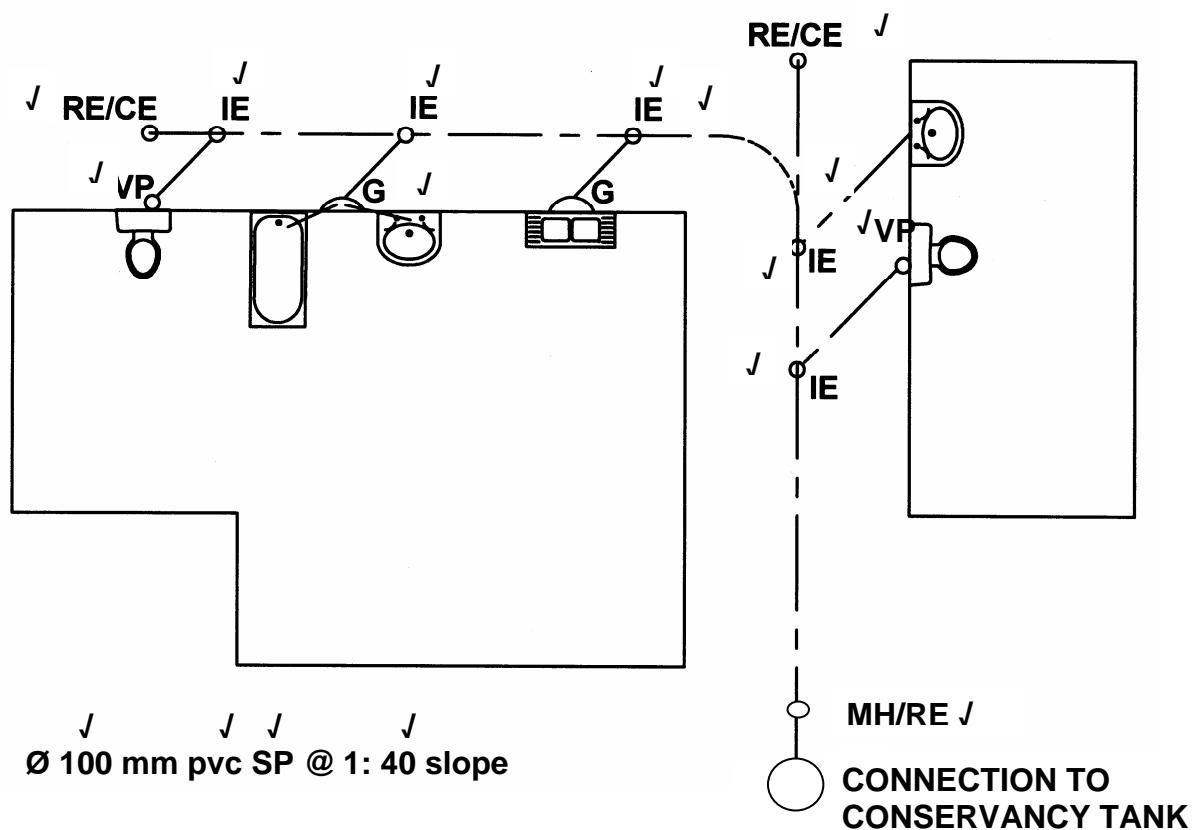
(4)

- |  |  |     |
|--|--|-----|
| 2.3  | <p>Learners' responses must be evaluated against recommendations based on advantages, disadvantages and climatic conditions of the area that the building is to be erected in.</p> <p><b>THIS IS AN OPEN-ENDED QUESTION.ANY ACCEPTABLE ANSWER</b></p>  | (1) |
| 2.4  | <ol style="list-style-type: none"> <li>1. Stringer ✓</li> <li>2. Cleats/Riser board ✓</li> <li>3. Support/Post/Prop/Strut ✓</li> <li>4. Soffit boards ✓</li> <li>5. Bearer ✓</li> <li>6. Brace ✓</li> <li>7. Folding wedges ✓</li> <li>8. Floor ✓</li> </ol>   | (8) |
| 2.5  | <ol style="list-style-type: none"> <li>1 – Common brick ✓</li> <li>2 – Screed ✓</li> <li>3 – Concrete ✓</li> <li>4 – Hard core ✓</li> <li>5 – Glass ✓</li> </ol>   | (5) |
| 2.6  | <p>Distance = (top stage line reading – bottom stage line reading) x 100</p> <p style="margin-left: 40px;">✓                  ✓                  ✓</p> <p style="margin-left: 40px;">= (1,525 – 1,475) x 100</p> <p style="margin-left: 40px;">✓</p> <p style="margin-left: 40px;">= 0,05 x 100</p> <p style="margin-left: 40px;">✓</p> <p style="margin-left: 40px;">= 5 metres ✓</p>   | (6) |
| 2.7  | <p>2.7.1          Piling forms the deepest part of the foundation and helps to</p> <p style="margin-left: 100px;">✓                                  ✓</p> <p style="margin-left: 100px;">distribute the weight of a building onto deeper firmer ground.</p> <p style="margin-left: 100px;">✓</p> <p>2.7.2          Underpinning is a temporary support that is used to support a part</p> <p style="margin-left: 100px;">✓</p> <p style="margin-left: 100px;">of a structure when maintenance or alteration needs to be done to a building.</p>   | (2) |
| 2.8  | <ul style="list-style-type: none"> <li>• A scaffold must never be left in an unsafe state.</li> <li>• It must never be moved whilst work is being done on it.</li> <li>• The frame must be made from the same material throughout.</li> <li>• Remove or cover all sharp edges or corners.</li> <li>• Always attach free standing scaffolds to buildings.</li> <li>• Safety harnesses must be worn whilst working on suspended scaffolding.</li> <li>• Ensure that working surfaces are safe.</li> <li>• Never over-load a scaffold.</li> <li>• Remove refuse and unneeded tools from scaffolds.</li> </ul> | (2) |
| <p><b>ANY TWO OF THE ABOVE OR OTHER ACCEPTABLE ANSWERS</b></p> |  |     |

**QUESTION 3****LO 3 AS 5,8,10**

- 3.1
- Use SABS-approved materials
  - The heating panel must face north
  - Insulate all hot water pipes
  - There should be no shade or shadows over the panels
  - Circulation pipes must be as short as possible
  - Cold water should be supplied from a storage cylinder or storage tank
- ANY ONE OF THE ABOVE OR OTHER ACCEPTABLE ANSWER** (1)

3.2 3.2.1



RE (Rodding eye)	2
IE (Inspection eye)	5
G (Gulley)	1
VP (Vent pipe)	2
Description of pipe	4
Manhole/ RE near connection to conservancy tank	1
Correct line type for drain	1
Total	16

3.2.2

- Rodding eye / cleaning eye
- Inspection eye
- Gulley
- Manhole

(1)

**ANY ONE OF THE ABOVE OR OTHER ACCEPTABLE ANSWER**

3.3

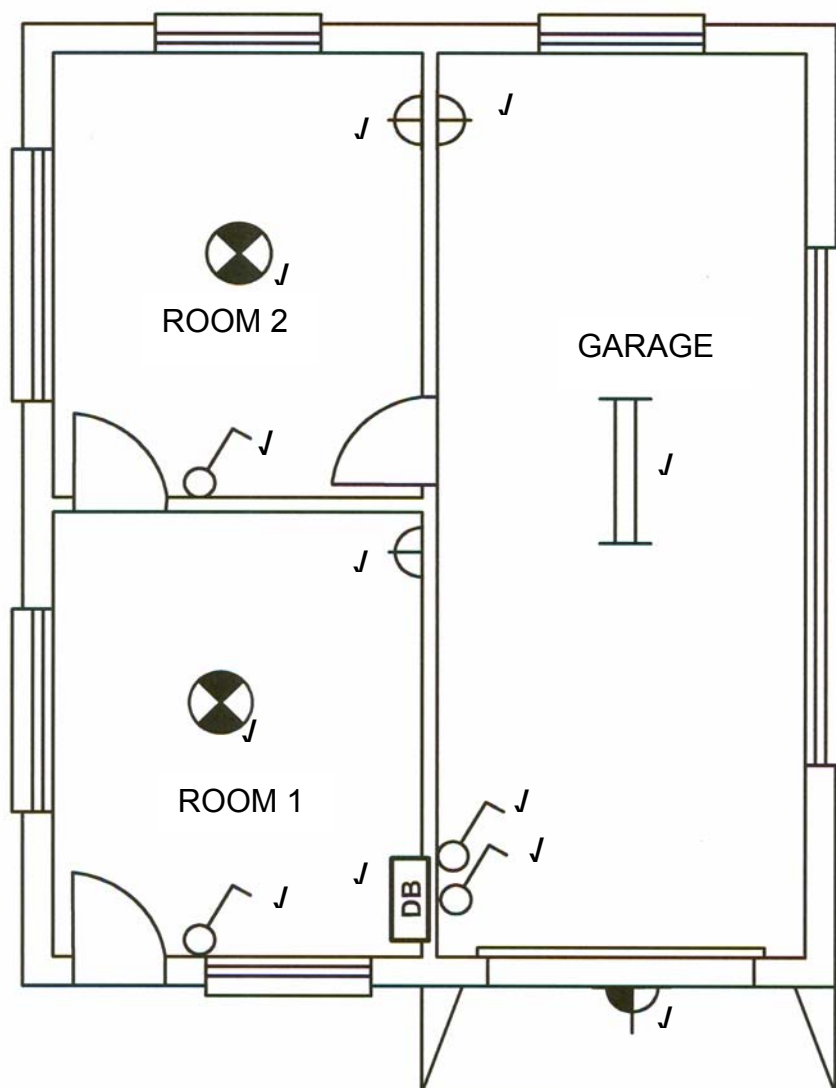


FIGURE 3.3

The following symbols will also be correct:

Light : X or O

Power socket/socket outlet :

(12)  
[30]



**QUESTION 4****LO 3 AS 2,5,9**

- 4.1      4.1.1
  - Base-plate ✓
  - Frustum (form/cone) ✓
  - Tamping rod ✓ (3)

4.1.2      The slump (1)

- 4.2
  - Clean the surface to remove any concrete that may be stuck to it.
  - Plug all holes that will not be used for the next operation.
  - Coat with a layer of shutter or form oil.
  - Store in a manner that will not allow it to twist and preferably under shelter. (1)

**ANY ONE OF THE ABOVE OR OTHER ACCEPTABLE ANSWER**

- 4.3      Learner's responses must be evaluated against recommendations based on advantages, disadvantages, sizes, availability, finishes, workability and cost of melamine boards.

**EXAMPLE :**

- Melamine boards are available in a wide range of colours and textures.
  - Melamine boards are readily available at a reasonable cost.
  - It is easy to work with melamine boards, etc.
- (2)

**THIS IS AN OPEN-ENDED QUESTION. ANY TWO ACCEPTABLE ANSWERS**

## 4.4 4.4.1

A	B	C	D
			Inside lengths of walls: $6\,000\text{ mm} - 2/220\text{ mm} = 5\,560\text{ mm} \checkmark$ <b>OR</b> $6\,000\text{ mm} - 440\text{ mm} = 5\,560\text{ mm}$  $3\,000\text{ mm} - 2/220\text{ mm} = 2\,560\text{ mm} \checkmark$ <b>OR</b> $3\,000\text{ mm} - 440\text{ mm} = 2\,560\text{ mm}$
1/	$\checkmark$ 5,56 <u>2,56</u>	$\checkmark$ 14,23 m <sup>2</sup>	Area of floor
1/	0,250 <u>0,250</u> ✓	$\checkmark$ 0,0625 m <sup>2</sup>	Area of tiles
$\frac{1}{0,0625} \checkmark$	14,23	$\checkmark$ 227,68	Number of tiles $14,23 \div 0,0625$
1/	227,68 <u>0,05</u> ✓	$\checkmark$ 11,38	5% waste = 11,38 tiles  Total number of tiles $227,68 + 11,38 = 239,06 = 240 \checkmark$

(11)

4.4.2

A	B	C	D
			<p>Inside lengths of walls: ✓  <math>6\,000\text{ mm} - 2 / 220\text{ mm} = 5\,560\text{ mm}</math>  <math>3\,000\text{ mm} - 2 / 220\text{ mm} = 2\,560\text{ mm}</math> ✓</p> <p>There are 2 inside walls with a length of 5 560 mm and 2 walls with a length of 2 560 mm</p>
2/ 2/	<u>5,560</u> <u>2,560</u>	11,120 m ✓ <u>5,120 m</u> ✓ 16,24 m	The total length of the inside walls is $11,120 + 5,120 = 16,240\text{ m}$ ✓
1/  1/	16,24 <u>2,7</u>  2,0 <u>0,91</u> ✓	43,848 m <sup>2</sup> ✓   1,82 m <sup>2</sup> ✓	<p>Area to be painted:  The wall is 2 700 mm high.</p> <p>Minus door opening:  The door is 2 000 mm high and 910 mm wide.</p>
	0,9 <u>0,6</u> ✓	✓ 0,54 m <sup>2</sup>	<p>Minus window opening:  Size of window: 900 mm x 600 mm</p> <p>Total deduction  <math>1,82 + 0,54 = 2,36\text{ m}^2</math> ✓  Total area of wall to be painted is  <math>43,848 - 2,36\text{ m}^2</math>  41,49 m<sup>2</sup> ✓</p>

(12)  
[30]**QUESTION 5****LO 3 AS 5,6**

- 5.1      5.1.1      m ✓  
5.1.2      Pascal ✓  
5.1.3      kg ✓  
5.1.4      Newton ✓  
5.1.5      N.m ✓ OR Nm

(5)

5.2 Area of triangle =  $\frac{1}{2}$  base x height  
 =  $\frac{1}{2}$  30 mm x 60 mm ✓  
 = 900 mm<sup>2</sup> ✓

Area square = l x b  
 = 40 mm x 40 mm ✓  
 = 1 600 mm<sup>2</sup> ✓

Total area = 900 mm<sup>2</sup> + 1 600 mm<sup>2</sup> ✓  
 = 2 500 mm<sup>2</sup> ✓

Take moments around AA

2 500 mm<sup>2</sup> x AA = (900 mm<sup>2</sup> x 60) + (1 600 mm<sup>2</sup> x 20) ✓  
 = 54 000 mm<sup>2</sup> + 32 000 mm<sup>2</sup> ✓  
 = 86 000 mm<sup>2</sup> ✓  
 AA =  $\frac{86\,000\text{ mm}^2}{2\,500\text{ mm}^2}$  ✓  
 = 34,4 mm ✓

OR

PART	AREA (A)	Y	AREA Y (Ay)
1	$\frac{1}{2} \times b \times h$ = $\frac{1}{2} \times 30 \times 60 = 900$	20 + 40 = 60 ✓	54 000 ✓
2	L x b = 40 x 40 = 1600	20 ✓	32 000 ✓
Total	2 500		86 000 ✓

$X = \frac{\sum Ay}{\sum A}$   
 =  $\frac{86\,000}{2\,500}$  ✓  
 = 34,4 mm ✓

OR

Position of centroid =  $\frac{(A_1 \times d) + (A_2 \times d)}{\text{Total area}}$   
 =  $\frac{(1\,600 \times 20) + (900 \times 60)}{2\,500}$  ✓  
 =  $\frac{32\,000 + 54\,000}{2\,500}$  ✓  
 =  $\frac{86\,000}{2\,500}$  ✓✓  
 = 34,4 mm ✓

- 5.3      5.3.1      Strut ✓  
           5.3.2      Strut ✓  
           5.3.3      Strut ✓  
           5.3.4      Tie ✓  
           5.3.5      Tie ✓  
           5.3.6      Strut ✓

(6)

5.4

5.4.1

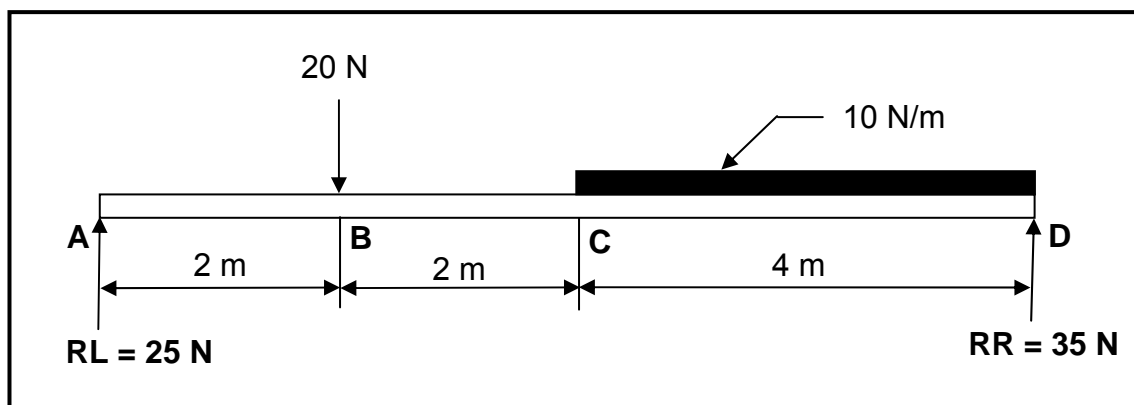
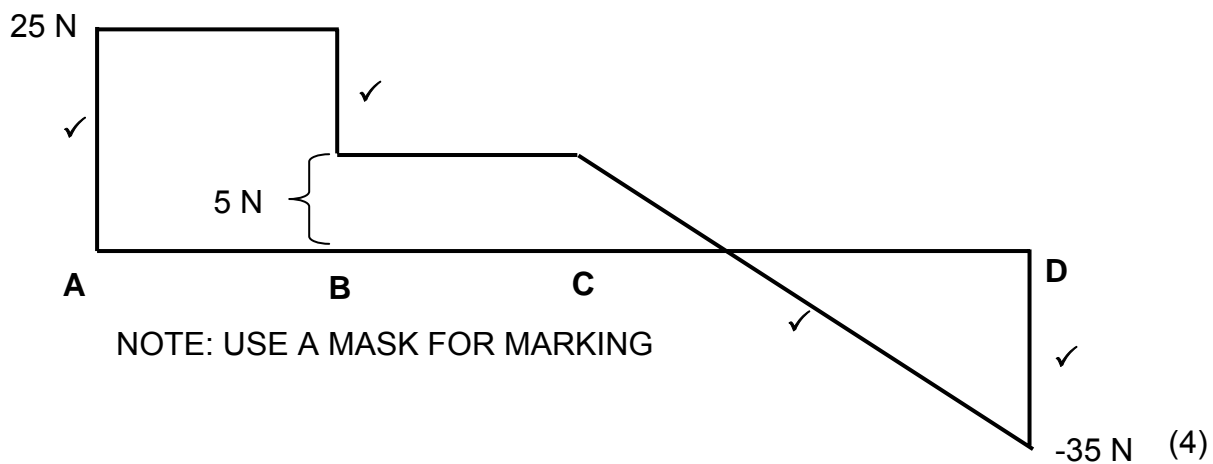


FIGURE 5.4

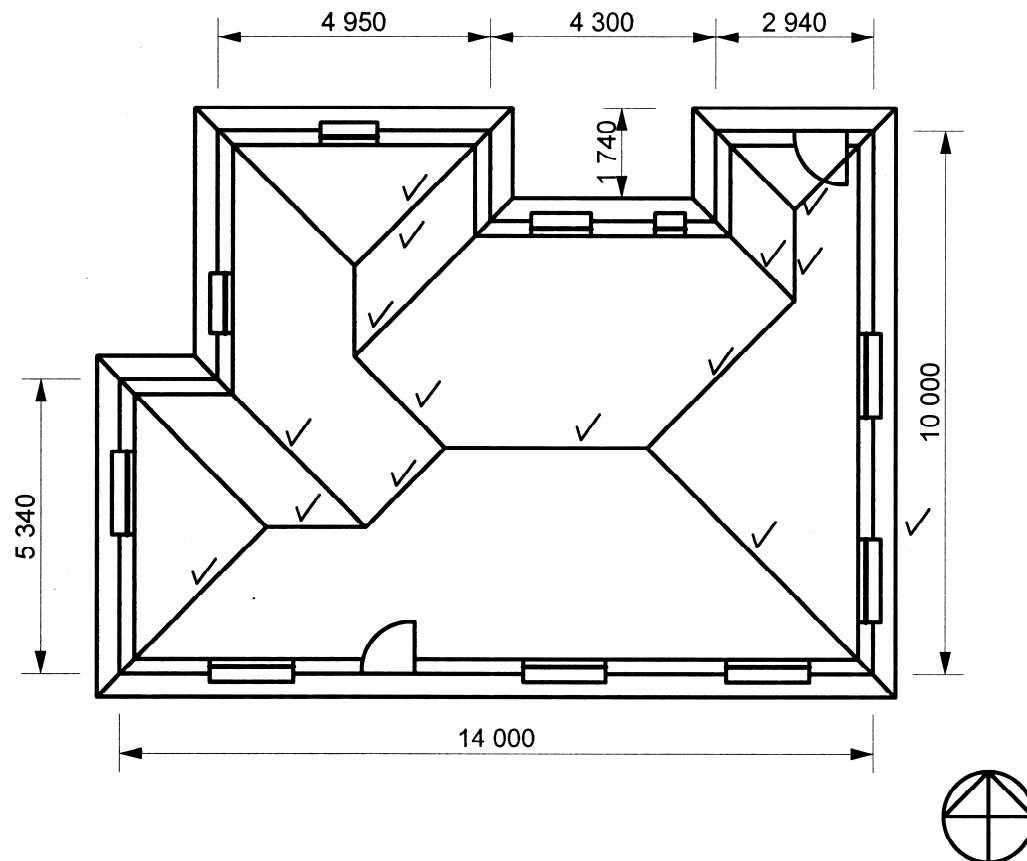


5.4.2      SFb = 5 N ✓

(1)  
[30]

**QUESTION 6****LO 3 AS 4,5**

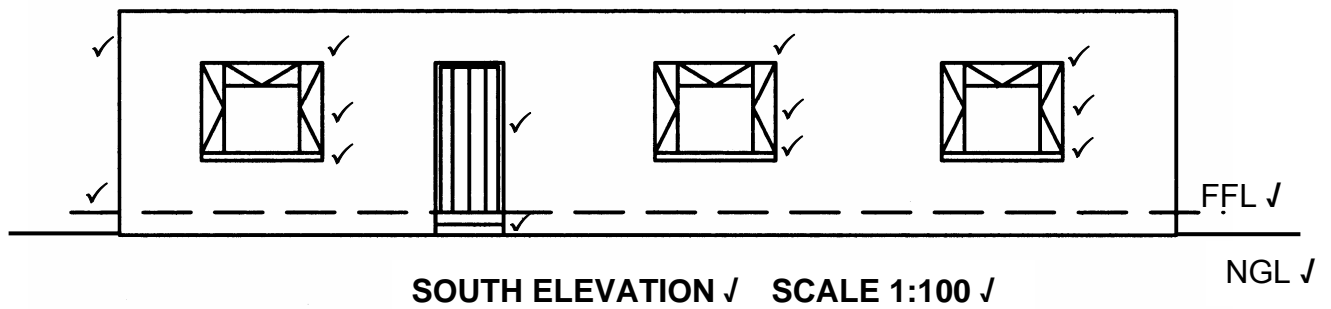
6.1

**FIGURE 6.1**

Ridges	11	
Valleys	3	
Overhang	1	
<b>Total</b>	<b>15</b>	

(15)

6.2

**FIGURE 6.2**

Correctness of:	Mark Allocation
Height of walls	1
Height of FFL	1
Position of windows	3
Opening parts of window	3
Window sills	3
Position of door	1
Step at door	1
<b>Labels correctly indicated:</b>	
NGL	1
FFL	1
Scale: 1:100	1
South Elevation	1
<b>Total</b>	<b>17</b>

(17)

6.3

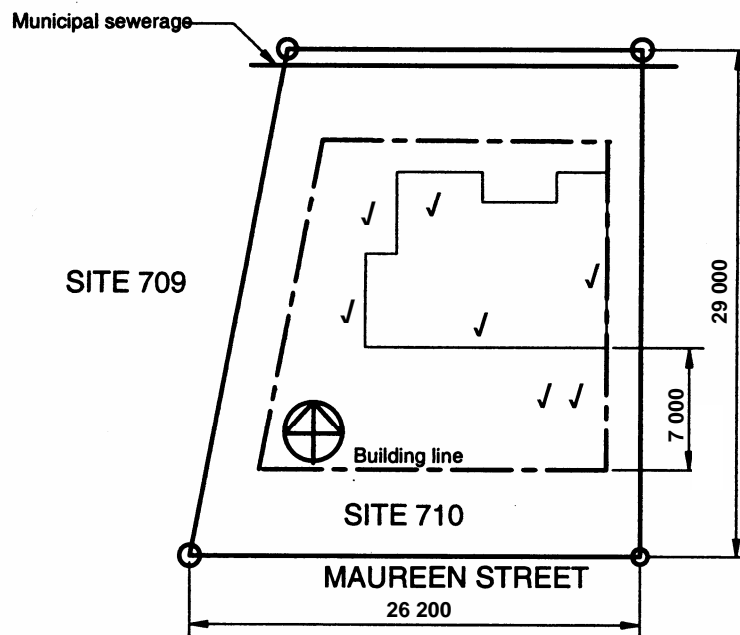


FIGURE 6.3 SCALE 1:250

(8)

**NOT DRAWN TO SCALE****NOTE:**

Provincial moderators and chief markers may accept alternative answers provided they can verify that such answers are indicated in reference material relevant to Civil Technology used in the province.

**[40]****TOTAL: 200**